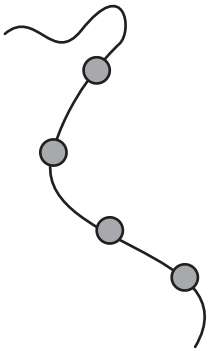
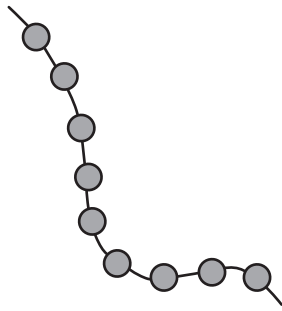


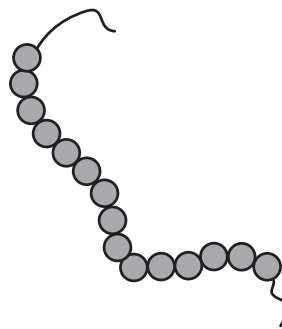
1 Tel de kralen



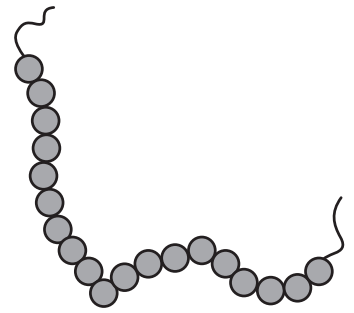
kralen



kralen



kralen



kralen

2 Maak er 10 van

4
6

3

2

6

9

3 Splitsen

6	
1	5
2	
	4
5	
	3

7	
1	6
	3
2	
	1
5	

17 Reken uit

$6,3 + 0,5 =$

$8,7 - 7,5 =$

$15,65 + 4,2 =$

$6,54 - 6,3 =$

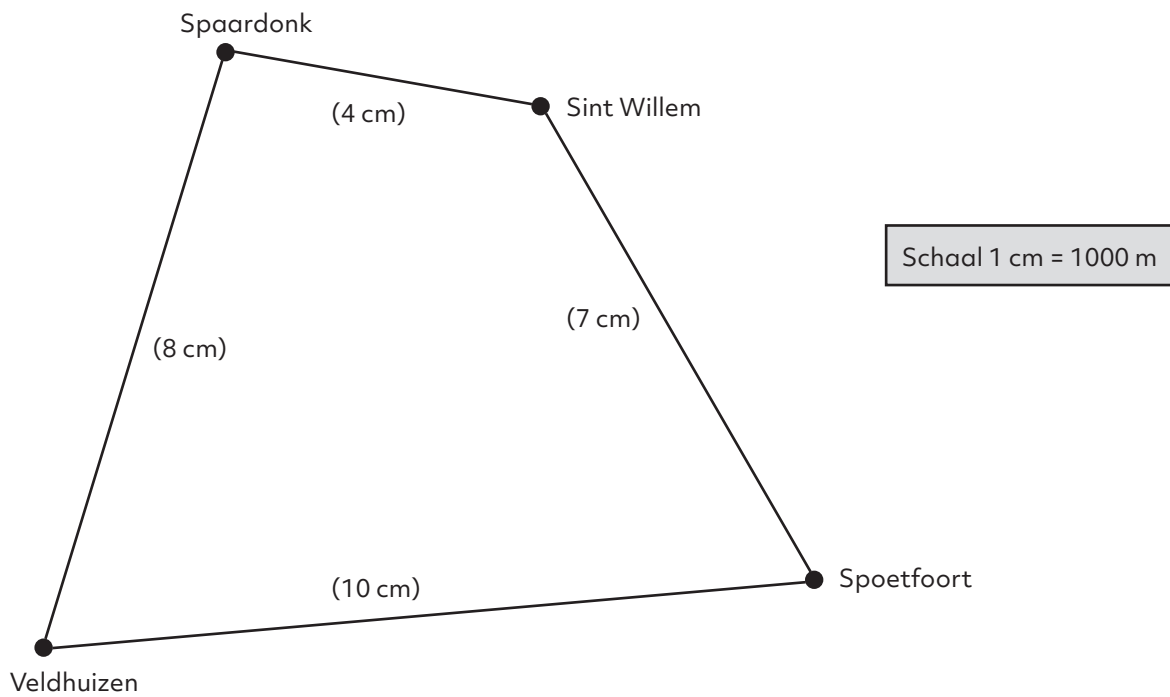
$87,7 + 2,3 =$

$20 - 6,4 =$

$0,5 + 8,07 =$

$7,18 - 3,28 =$

18 Hoe ver?



Sint Willem naar Spoetfoort is  km

Spoetfoort naar Veldhuizen is  km

Spaardonk naar Veldhuizen is  km

Spaardonk naar Sint Willem is  km